



EDUPREPARATOR

Prepare For The Best, From The Best

GENERAL TEST

CUET 2022

PREVIOUS YEAR QUESTION PAPER

SOCIAL MEDIA



www.edupreparator.com

9990901901, 9319737316

OFFLINE CENTERS - ASHOK VIHAR, PATEL NAGAR & NOIDA

Head Office : T-1, Usha Chamber, Above Master Bakers,
Deep Market, Ashok Vihar, Delhi - 52

Congratulations!



ISHITA JAIN
STATISTICS (HONS.)
HINDU COLLEGE



PARTH
ECONOMICS (HONS.)
HANSRAJ COLLEGE



SAAKHI DEWAN
PSYCHOLOGY (HONS.)
LADY SHRIRAM COLLEGE



KHUSHARG VERMA
HISTORY (HONS.)
ST STEPHAN COLLEGE



PREAL CHAUHAN
GEOGRAPHY (HONS.)
KIRORI MAL COLLEGE

OUR CUET & CLAT ACHIEVERS 2024



OUR CUET ACHIEVERS 2023



and Many More...

OFFLINE CENTERS - ASHOK VIHAR, PATEL NAGAR & NOIDA



Add : T-1, Usha Chamber, Above
Master Bakers, Deep Market,
Ashok Vihar, Delhi - 110052

SCAN QR TO
GO TO COURSE



www.edupreparator.com

9990901901
9319737316

GENERAL TEST CUET-2022

Q.1 Actress and Model "Harnaaz Sandhu" was crowned as in Dec 2021.

- (A) Miss World 2021
- (B) Miss India 2021
- (C) Miss Universe 2021
- (D) Miss Earth 2021

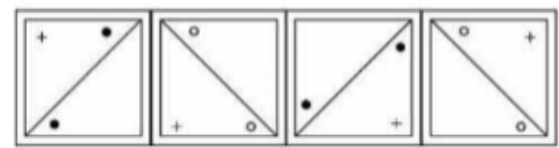
(B) TGEVCPKNG

(C) TGEVCPING

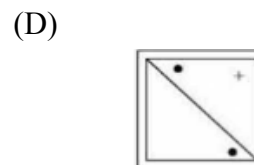
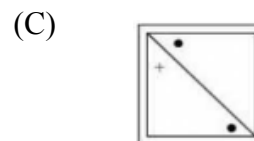

(D) GTEVCPING

Q.2 If each side of a cube is reduced by 50%. the surface area will reduced by.

- (A) 75%
- (B) 50%
- (C) 25%
- (D) 100%



Q. 5 The next figure is ?



Q.3 If * is an operation such that $a * b = 3a - 4b$, find the value of $3 * 4$

- (A) 0
- (B) -7
- (C) 7
- (D) -1

Q.4 In a certain language TRIANGLE is written as VTKCPING. How RECTANGLE will be written

(A) TGEUCPING

Q.6 Two numbers are in ratio of 7:10 and if the sum of the numbers is 119. Find the different number.

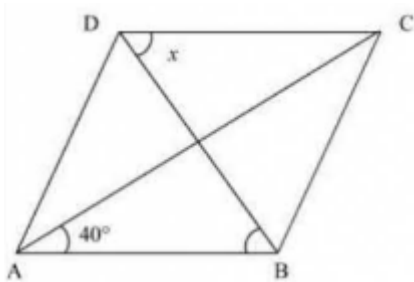


- (A) 7
- (B) 21
- (C) 17
- (D) 12

Q.7 'Who is the first (chief of) Defence Staff of the Indian Armed forces?

- (A) Field Marshal K. M Cariappa
- (B) General Manoj Mukund Narayan
- (C) General Bipin Rawat
- (D) General Manoj Pande

Q.8 In the given figure ABCD is a Rhombus, the value of x is .



- (A) 40°
- (B) 50°
- (C) 90°
- (D) 60°

Q.9 What is the next number?

2,9, 28, 65,.....

- (A) 130
- (B) 126
- (C) 139
- (D) 136

Q.10 'Neeraj Chopra' is associated with which sports event?

- (A) Wrestling
- (B) Boxing
- (C) Shooting
- (D) Javelin Throw

Q.11 The missing term of the series is

A2, C5, E8, G11,.....

- (A) I 13
- (B) H 14
- (C) I 14
- (D) H 13

Q.12 What is the full form of NABARD?



TARGET CUET 2025

- (A) National Bank for Agriculture and Resource Development
- (B) National Bank for Agriculture and Rahul Development
- (C) National Bank for Asian Research Development
- (D) National Bank for Agriculture Related Development

LISTI Crematoriums (Samadhi sthal)	LISTII (Person)
(A) Ekta sthal	I. Jawahar Lal Nehru
(B) Vijay Ghat	II. Rajiv Gandhi
(C) Veer Bhumi	III. Lal Bahadur Shastri
(D) Shanti Van	IV. Giani Zail Singh

Choose the correct answer from the option given below:

Q.13 Match List I with List II

LIST I (Equations)	List II Solution
(A) $2x-4=2-x$	I. $x=3$
(B) $7-4x=0$	II. $x=2$
(C) $x/2-3=0$	III. $x=7/4$
(D) $2x+3=x+6$	IV. $x=6$

Choose the correct answer from the options given below:

- (A) A-II, B-IV, C-III, D-I
- (B) A-I, B-III, C-IV, D-II
- (C) A-II, B-II, C-IV, D-II
- (D) A-II, B-I, C-IV, D-III

Q.14 Match List I with List II

(A) A-I, B-II, C-III, D-IV

(B) A-II, B-IV, C-I, D-III

(C) A-IV, B-II, C-II, D-I

(D) A-III, B-I, C-IV, D-III

Q.15 A, B, C, D and E are standing in row. 'A' is between 'B' and 'D'. E is not at the starting of row. 'C' is just before D.

Study above statement and answer the question

Who is at the middle of the row?

(A) D

(B) C

(C) A

(D) B



TARGET CUET 2025

Q.16 A.B. C.D and E are standing in row. 'A' is between 'B' and 'D'. E is not at the starting of row. 'C' is just before D.

Study above statement and answer the question

Who is at the starting of the row


- (A) C
- (B) D
- (C) A
- (D) B

Q.17 A.B. C.D and E are standing in row. 'A' is between 'B' and 'D'. E is not at the starting of row. 'C' is just before D.

Study above statement and answer the question

'B' is standing in between

- (A) 'E' and 'D'
- (B) 'A' and 'E'
- (C) 'D' and 'C'
- (D) 'A' and 'C'



Q.18 The number of triangles in above figure is

- (A) 5
- (B) 10
- (C) 18
- (D) 6


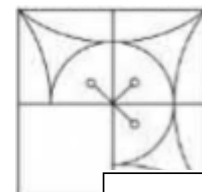
Q.19 'Which of the following standing committee of parliament has no member from Rajya Sabha?

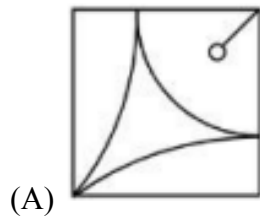
- (A) Public Account committee
- (B) Estimate Committee
- (C) Committee on public undertaking
- (D) Committee on government assurance

Q.20 New education policy. 2020 is goal to achieve 100% gross enrolment Ratio(GER) in school Education by the year

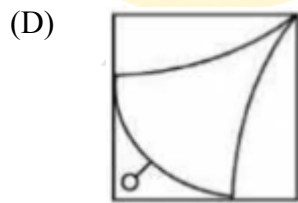
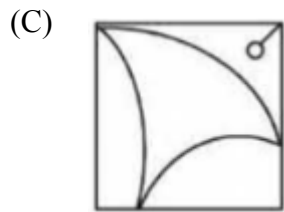
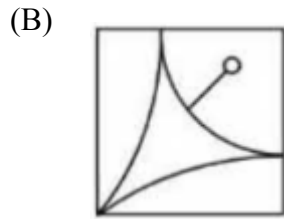
- (A) 2025
- (B) 2030
- (C) 2035
- (D) 2040

Q.21 Which of the following will complete the adjoining figure





- (A) 80°
- (B) 70°
- (C) 60°
- (D) 50°



Q.23 Which of the following date world environment day is celebrated?

- (A) 21 June
- (B) 5 June
- (C) 21 July
- (D) 22 March

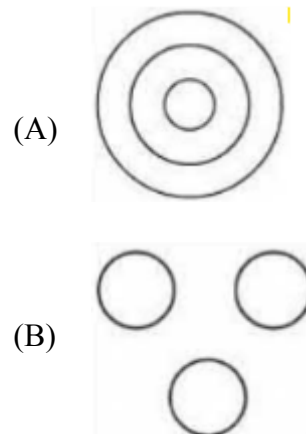
Q.24 If DOG =26.FLY =43 them what is the code for 'BIRD'

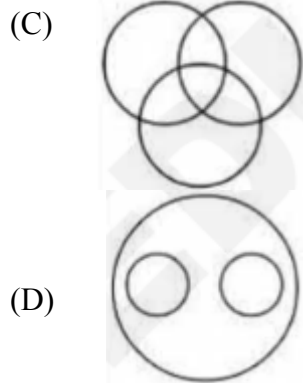
- (A) 60
- (B) 32
- (C) 33
- (D) 24

Q.22 In the given figure l II m II n. the value of x is



Q.25 Which is the best diagram, showing the relation among Father, Mother and family.





Q.26 Which of the following seas has highest salinity in the world?

- (A) Dead sea
- (B) Black sea
- (C) Red sea
- (D) Mediterranean sea

Q.27 If the sugar price is increased by 25% by how much percent consumption should be reduced that expense remains same.

- (A) 25%
- (B) 20%
- (C) 30%
- (D) 35%

Q.28 Mohan's Mother is three times as old as Mohan. After 6 years. his mother will be two times as old as he will be them, find the age of Mohan.

- (A) 18 years
- (B) 6 years
- (C) 3 years

(D) 16 years

Q.29 Which organisation published the Human Development Index (HDI) Report?

- (A) UNDP
- (B) UNESCO
- (C) IMF
- (D) UNICEF

Q.30 Penicillium is a

- (A) Virus
- (B) Algae
- (C) Algae
- (D) Bacteria

Q.31 In a row of 35 student,. Ramesh is 24th from starting. Two students from last went away. What is the position of Ramesh from last row?

- (A) 12th
- (B) 10th
- (C) 14th
- (D) 11th

Q.32 Which one of the following is the correct sequence in the decreasing order of contribution of different sources to the gross domestic product (GDP) in India.

- (A) Service- Industry-Agriculture
- (B) Service-Agriculture-Industry
- (C) Industry- Service –Agriculture



(D) Agriculture-Industry-service

Q.33 Match List I with List II

List I(Country)	List II(Capital city)
(A) Ukraine	I. Kiev
(B) SrLanka	II. Warsaw
(C) Turkey	III. Colombo
(D) Poland	IV. Ankara

Choose the correct answer from the options given below:

- (A) A-1,B-III, C-II, D-IV
- (B) A-II, B-III, C-1V, D-I
- (C) A-II, B-III, C-IV, D-II
- (D) A-I, B-II, C-III, D-IV

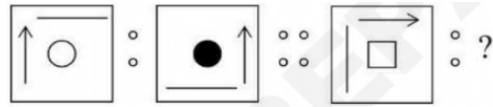
Q.34 ‘Which one of the following bills must be passed by each house of the India parliament separately by special majority?

- (A) Money Bill
- (B) Finance Bill
- (C) Finance Bill
- (D) Constitutional Amendment Bill

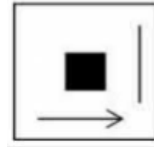
Q.35 The average of first 8 multiples of 8 is.

- (A) 41
- (B) 45
- (C) 46
- (D) 31

Q.36



(A)



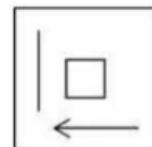
(B)



(C)



(D)



Q.37 At hill station, the boiling point of water will be

- (A) Same as at sea level
- (B) More than that at sea level
- (C) Less than that at sea level
- (D) Equal to the melting point of Ice



TARGET CUET 2025

Q.38 A rectangular paper of width 8 cm and length 22cm rolled along it width and a cylinder is formed.

On the above Intimation, Solve the question given below

The radius of the cylinder is-

- (A) $2/7$ cm
- (B) 7cm
- (C) $7/2$ cm
- (D) 14cm

Q.39 A rectangular paper of width 8 cm and length 22cm rolled along it width and a cylinder is formed.

On the above Intimation, Solve the question given below

If the outer surface area of cylinder is pointed @ Rs $0.5/\text{cm}^2$, then the total cost of painting is

- (A) Rs 88
- (B) Rs 176
- (C) Rs 78
- (D) Rs 186

Q.40 A rectangular paper of width 8 cm and length 22em rolled along it width and a cylinder is formed.

On the above Intimation, Solve the question given below

The volume of cylinder is

- (A) 98cm^2

- (B) $49\pi\text{cm}^2$

- (C) 49cm^2

- (D) $98\pi\text{cm}^3$

Q.41 Match List I with List II

LIST I (Movement/organization)	LISTI II (Founder)
(A) Brahma Samaj	I. Henry Vivian Derozio
(B) Satya shodhak samaj	II. Gopal Krishan Gokhale
(C) Young Bengal Movement	III. Raja Ram Mohan Roy
(D) Servant of India society	IV. Jyotiba Phule

Choose the correct answer from the options given below:

- (A) A-I, B-II, C-III, D-IV
- (B) A-II, B-IV, C-I, D-III
- (C) A-III, B-IV, C-I, D-I
- (D) A-III, B-IV, C-I, D-II

Q42. The headquarter of RBI is situated at-

- (A) Delhi
- (B) Kolkata
- (C) Chennai
- (D) Mumbai



Q.43 Who is the chairperson of 15TM finance commission

- (A) Y. V. Reddy
- (B) N.K. Singh
- (C) Vijay Kelkar
- (D) C. Rangarajan

- (A) —8700
- (B) 0
- (C) 8700
- (D) 2900

Q.44 Headquarter of World Health Organization (WHO) is located at –

- (A) Paris
- (B) Geneva
- (C) New York
- (D) Washington D.C.

Q.48 If the area and sum of parallel side of a trapezium are 48 cm² and 48cm respectively. Then the distance between the parallel sides is

- (A) 1/2 cm
- (B) 1 cm
- (C) 2 cm
- (D) 3 cm

Q.45 Samsung : mobile :: Action: ?

- (A) Cricket
- (B) Shoes
- (C) Fighter
- (D) Movie

Q.49 One TB (Terabyte) approximately occupies or comprises which of the following data or space size

- (A) 1000 KB
- (B) 1000 GB
- (C) 1024 KB
- (D) 1024 GB

Q.46 The deepest oceanic trench 'Mariana' is located in-

- (A) Atlantic Ocean
- (B) Arctic Ocean
- (C) Pacific Ocean
- (D) Indian Ocean

Q.50 If 36 persons can finish 50% of work in 12 days In how many days 72 person can finish the complete work?

- (A) 6
- (B) 3
- (C) 9
- (D) 12

Q.47 Find the value of $(25)^3 + (-29)^3 + (4)^3$



Q.51 Who is known as 'Nightingale of India'?

- (A) Vijaya Laxmi Pandit
- (B) Indira Gandhi
- (C) Sarojini Naidu
- (D) Lata Mangeshkar

Q.52 Which incident led Gandhi ji to withdraw non-cooperation movement?

- (A) Kakori episode
- (B) Chauri-Chaura episode
- (C) Yang-bang episode
- (D) Jallianwala Bagh episode

Q.53 A shopkeeper offers discount 50% + 50% on a shirt of M.R.P 2 800, find the selling price of the shirt.

- (A) 700
- (B) 0
- (C) 400
- (D) 200

Q.54 Pointing a man in a photograph. Karina Said. 'His mother is the only daughter of my mother.' How is Karina related to the man of photograph?

- (A) Mother
- (B) Sister
- (C) Wife

(D) Daughter

Q.55 If 180 meter long train crosses a pole in 9 seconds. find the speed of train in kilo meter/hour.

- (A) 72 km/h
- (B) 36 km/h
- (C) 20 km/h
- (D) 90 km/h

Q.56 Match List I with List II

LIST I (Mountains pass)	LIST II (State)
A. Mana	I. Sikkim
B. Nathula	II. Jammu & Kashmir
C. Zojila	III. Himachal Pradesh
D. Shipkila	IV. Uttarakhand

Choose the correct answer from the options given below:

- (A) A-II, B-IV, C-I, D-III
- (B) A-III, B-II, C-IV, D-I
- (C) A-IV, B-I, C-II, D-III
- (D) A-IV, B-I, C-III, D-II

Q.57 If the cost of 4 pens and 6 note books is % 800, then find the cost of 6 pens and 9 note books.

- (A) Rs 900
- (B) Rs 1200



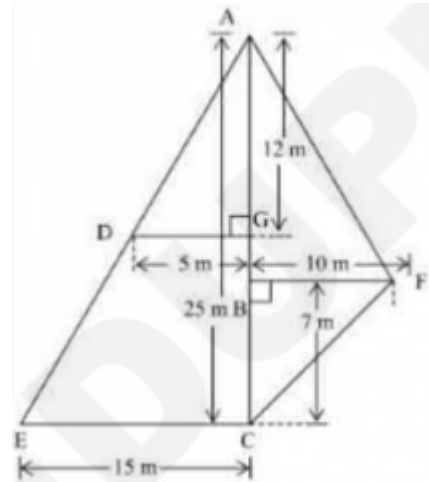
- (C) Rs 1000
- (D) Rs 1100

(D) A ring shaped island with a lagoon at the Centre

Q.58 The value of

- (A) 49
- (B) 0.5
- (C) 0.05
- (D) 0.49

Q.62 Study the adjoining picture and answer the following questions:



Q.59 EVM Stands for

- (A) Electric Vending Machine
- (B) Electronic Vending Machine
- (C) Electronic Voting Machine
- (D) Electric Voting Machine

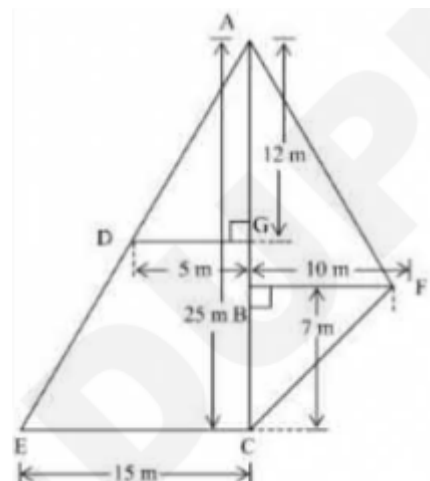
The area of ΔABF is.

Q.60 If the volume of a cube is 27 cm^3 , then the diagonal of cube is

- (A) 3 cm
- (B) $\sqrt[3]{3} \text{ cm}$
- (C) $\sqrt{3}$
- (D) $\frac{1}{\sqrt{3}}$

- (A) 180 m^2
- (B) 90 m^2
- (C) 125 m^2
- (D) 60 m^2

Q.63 Study the adjoining picture and answer the following questions:



Q.61 An Atoll is

- (A) A lake in the Crates
- (B) A Lagoon along the shores
- (C) A lake in Glaciated mountains



The area of Trapezium DGCE is.

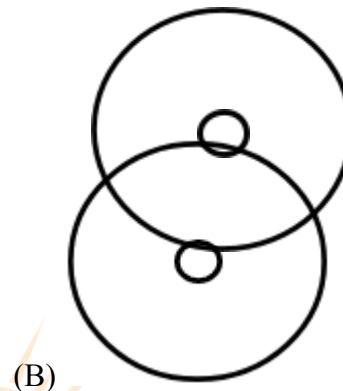
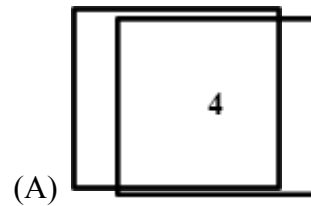
- (A) 100 m^2
- (B) 260 m^2
- (C) 70 m^2
- (D) 130 m^2

Q.64 Study the adjoining picture and answer the following questions:

Area of ΔAFC is.

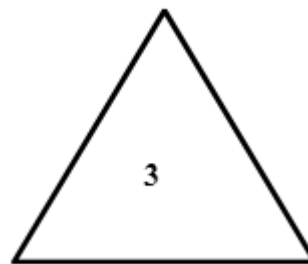
- (A) 85 m^2
- (B) 75 m^2
- (C) 125 m^2
- (D) 250 m^2

Q.67 Which of the following figure is odd one among the all.



Q.65 Which country will host the G-20 summit in 2023?

- (A) Italy
- (B) Germany
- (C) Germany
- (D) Japan



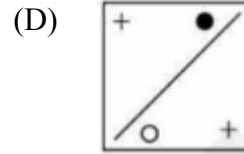
Q.66 If 60% of $80 = x\%$ of 96 , then x is.

- (A) 50
- (B) 40
- (C) 55
- (D) 45



Q.68 Sunit is going towards north, after going 8 km he turns left and goes 6 km. What is the distance of Sunit from initial point.

- (A) 14 km
- (B) 10 km
- (C) 8km
- (D) 6km



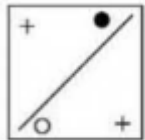
Q.69 At which of the following place, weight of an object is maximum?

- (A) At equator
- (B) At poles
- (C) At tropic of Cancer
- (D) At tropic of Capricorn

Q.71 Indian National Congress was founded by

- (A) W.C Banerjee
- (B) A.O Hume
- (C) MK Gandhi
- (D) J.L. Nehru

Q.70 The mirror image of along the dotted line is



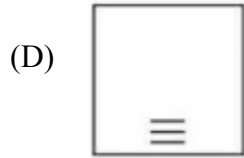
- (A)
- (B)
- (C)

Q.72 The next figure is

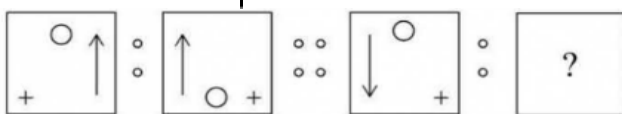
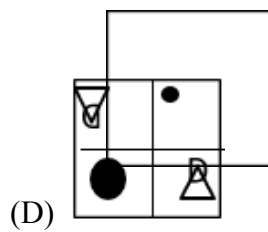
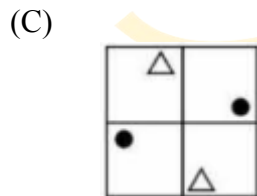
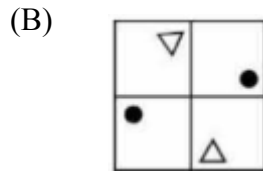
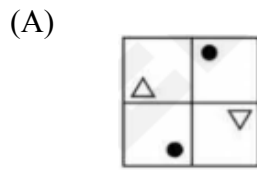
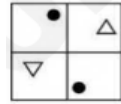


- (A)
- (B)
- (C)





Q.73 'Water image of' is



Q75

LIST I	LIST II
A. Article 368	I. Panchayati Raj
B. Article 40	II. Emergency Provision
C. Article 60	III. Constitution amendments
D. Article 352	IV. Impeachment of President

Choose the correct answer from the option given below:

- (A) A-II, B-I, C-IV, D-III
- (B) A-III, B-I, C-IV, D-II
- (C) A-III, B-IV, C-I, D-II
- (D) A-II, B-IV, C-I, D-III





LIVE CLASSES + TEST SERIES

AVAILABLE COURSES

CUET 2025 FULLY A.I. BASED CHAPTERWISE TEST
HUMANITIES CUET SIMULATED MOCK TEST
 DOMAINS
 Live Online Classes + Test Series
 STUDY MATERIAL

- General Test
- English Language
- Geography
- History
- Economics
- Psychology
- Info Practice
- Pol Science

9990901901, 9311902282
 www.edupreparator.com

GENERAL TEST LIVE CLASSES + TEST SERIES **ADMISSION OPEN**

- > Live 60+ hr Interactive Classes + Recorded Lecture
- > 10 Full Length Mock Test of General Test
- > 14 Month Wise Current Affairs Test (Mar23-Apr 24)
- > General Test Booklets
- > Current Affairs material in PDF

TEAM OF EXPERTS
 NIKHIL SAREEN, RAJESH SHARMA & CHAITAN SHARMA

CUET 2025 CURRENT AFFAIRS LIVE CLASSES + TEST SERIES **ADMISSION OPEN**

- Live Classes and recorded classes 20+ Hours
- 18 Month-wise Test (Nov 23 -April 25)
- PDF support Current Affairs material
- Recorded Video Discussion
- AI Based Test Analysis

NIKHIL SAREEN
 Current Affairs Expert

CUET 2025 FULLY A.I. BASED CHAPTERWISE TEST
COMMERCE CUET SIMULATED MOCK TEST
 DOMAINS
 Live Online Classes + Test Series
 STUDY MATERIAL

- B. Studies
- Accountancy
- Mathematics
- Economics
- Informatics Practices

9990901901, 9311902282
 www.edupreparator.com

ENGLISH LANGUAGE LIVE CLASSES + TEST SERIES **ADMISSION OPEN**

- > Live 20+ hr Interactive Classes + Recorded Lecture
- > 10 Full Length Mock Test of English Language
- > English Language Booklet

TEAM OF EXPERTS
 LALI MATTHEW & RISHABH SAINI

ENGLISH LANGUAGE + GENERAL TEST LIVE CLASSES + TEST SERIES **ADMISSION OPEN**

- > 75 HR+ LIVE CLASSES AND RECORDED CLASSES
- > 10 FULL LENGTH TEST OF ENGLISH LANGUAGE
- > 10 FULL LENGTH TEST OF GENERAL TEST
- > 14 MONTH-WISE CURRENT AFFAIRS TEST (MAR 23-APR 24) + RECORDED VIDEO DISCUSSION
- > GENERAL TEST + CURRENT AFFAIRS MATERIAL

TEAM OF EXPERTS
 LALI MATTHEW, RISHABH SAINI, NIKHIL SAREEN, RAJESH SHARMA & CHAITAN SHARMA



PREPARED BY
TEAM OF EXPERTS

TEST SERIES

AVAILABLE COURSES

CUET 2025 FULLY A.I. BASED CHAPTERWISE TEST
HUMANITIES CUET SIMULATED MOCK TEST
 DOMAINS
 Test Series
 STUDY MATERIAL

- General Test
- English Language
- Geography
- History
- Economics
- Psychology
- Info Practice
- Pol Science

9990901901, 9311902282
 www.edupreparator.com

GENERAL TEST TEST SERIES **ADMISSION OPEN**

- > 10 Full Length Mock Test of General Test
- > 14 Month Wise Current Affairs Test (Mar23-Apr 24)
- > General Test Booklet
- > Current Affairs material in PDF

TEAM OF EXPERTS
 NIKHIL SIR, RAJESH SIR CHAITAN SIR

CUET 2025 CURRENT AFFAIRS TEST SERIES **ADMISSION OPEN**

- 18 Month-wise Test (Nov 23-April 25)
- PDF support Current Affairs material
- Recorded Video Discussion
- AI Based Test Analysis

NIKHIL SAREEN
 Current Affairs Expert

CUET 2025 FULLY A.I. BASED CHAPTERWISE TEST
COMMERCE CUET SIMULATED MOCK TEST
 DOMAINS
 Test Series
 STUDY MATERIAL

- B. Studies
- Accountancy
- Mathematics
- Economics
- Informatics Practices

9990901901, 9311902282
 www.edupreparator.com

ENGLISH LANGUAGE TEST SERIES **ADMISSION OPEN**

- > 10 Full Length Mock Test of General Test
- > English Language Booklets

TEAM OF EXPERTS
 LALI SIR, RISHABH SIR

ENGLISH LANGUAGE + GENERAL TEST TEST SERIES **ADMISSION OPEN**

- > 10 FULL LENGTH TEST OF ENGLISH LANGUAGE
- > 10 FULL LENGTH TEST OF GENERAL TEST
- > 14 MONTH-WISE CURRENT AFFAIRS TEST (MAR 23-APR 24) + RECORDED VIDEO DISCUSSION
- > GENERAL TEST + CURRENT AFFAIRS MATERIAL

TEAM OF EXPERTS
 LALI MATTHEW, RISHABH SAINI, NIKHIL SAREEN, RAJESH SHARMA & CHAITAN SHARMA



Add : T-1, Usha Chamber, Above Master Bakers, Deep Market, Ashok Vihar, Delhi - 110052



9990901901
9319737316